

MATEMATIKA 20. 4. – 24. 4.2020

Prirodzené čísla od 0- 20

1. Počítaj do 20 na prstoch, spomeň si ako ukazujeme číslo 10- prekríž nohy. Začni 0 1 2.... a tiež naspäť od 20 19 18....

2. Spočítaj a zapíš počet vyfarbených guľičiek.

Two vertical towers of beads on black bases. The left tower has 10 red beads. The right tower has 1 white bead at the bottom and 9 white beads above it.

| | |
|---|---|
| 1 | 1 |
|---|---|

Two vertical towers of beads on black bases. The left tower has 10 red beads. The right tower has 1 white bead at the bottom and 9 white beads above it.

| | |
|--|--|
| | |
|--|--|

Two vertical towers of beads on black bases. The left tower has 10 red beads. The right tower has 10 white beads.

| | |
|--|--|
| | |
|--|--|

Two vertical towers of beads on black bases. The left tower has 10 red beads. The right tower has 10 white beads.

| | |
|--|--|
| | |
|--|--|

Two vertical towers of beads on black bases. The left tower has 10 red beads. The right tower has 10 white beads.

| | |
|--|--|
| | |
|--|--|

Two vertical towers of beads on black bases. The left tower has 10 red beads. The right tower has 10 white beads.

| | |
|--|--|
| | |
|--|--|

Two vertical towers of beads on black bases. The left tower has 10 red beads. The right tower has 10 white beads.

| | |
|--|--|
| | |
|--|--|

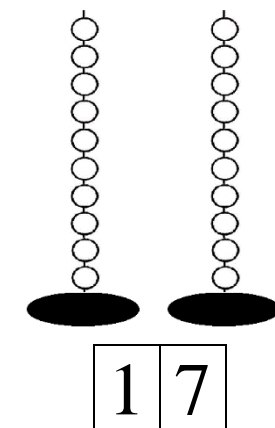
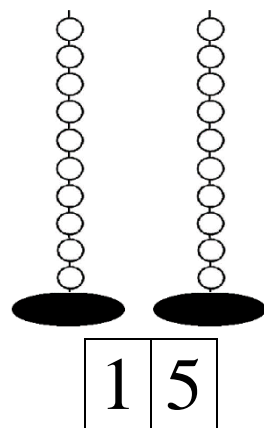
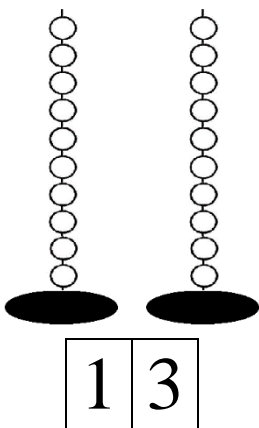
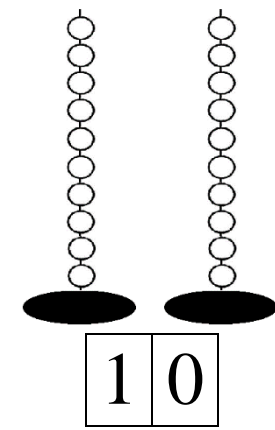
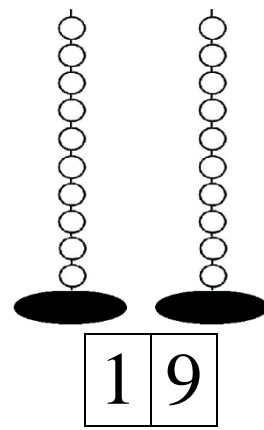
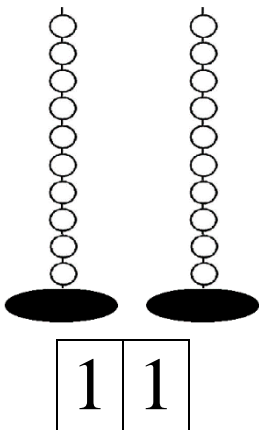
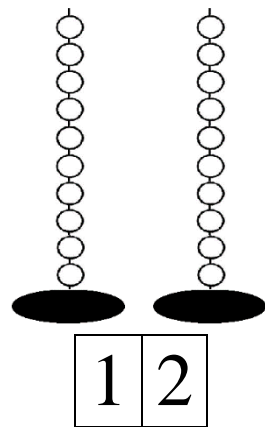
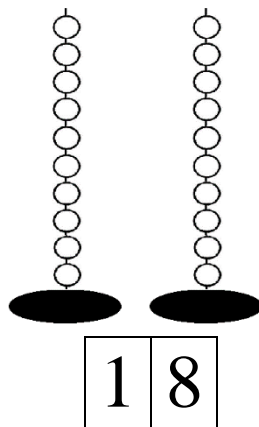
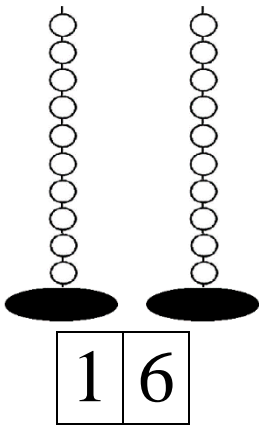
Two vertical towers of beads on black bases. The left tower has 10 red beads. The right tower has 10 white beads.

| | |
|--|--|
| | |
|--|--|


Two vertical towers of beads on black bases. The left tower has 10 red beads. The right tower has 10 white beads.

| | |
|--|--|
| | |
|--|--|

3. Vyfarbi guličky podľa čísla.



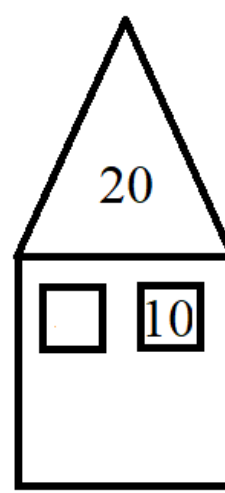






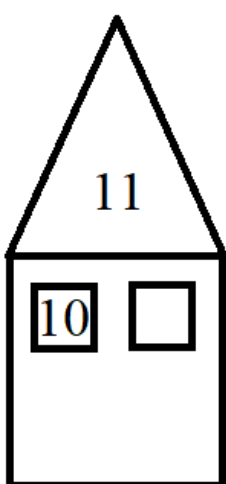

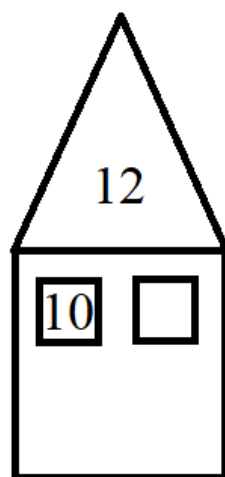


4. Doplně číselný rad od 1-20



5. Doplně číselný rad

| | | | | | | | | | | | |
|---|----|----|----|----|----|----|----|----|----|----|----|
| ➔ | 10 | 11 | | | 14 | 15 | | 17 | | 19 | |
| ➔ | 10 | | 12 | 13 | | 15 | 16 | | 18 | | 20 |
| ➔ | 10 | 11 | 12 | | 14 | | 16 | 17 | | 19 | |
| ➔ | | | 12 | 13 | | 15 | | 17 | | | 20 |
| ➔ | | 11 | | 13 | 14 | | 16 | | 18 | | 20 |

6. Rozlož číslo. Pomôž si úlohou 2.





7. Porovnaj $>$ $=$ $<$

Pomôž si číselnou osou! Číslo, ktoré je vľavo je menšie a číslo, ktoré je väčšie je vpravo.



$11 \bigcirc 20$

$12 \bigcirc 15$

$19 \bigcirc 18$

$10 \bigcirc 10$

$12 \bigcirc 14$

$9 \bigcirc 19$

$15 \bigcirc 17$

$18 \bigcirc 13$



$20 \bigcirc 13$



$20 \bigcirc 19$



$14 \bigcirc 17$



$18 \bigcirc 13$



8. Vypočítaj.



 $10 +$  $=$

 $10 +$  $=$

 $10 +$  $=$

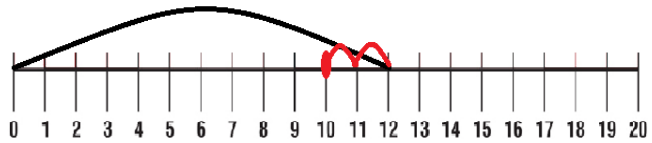
 $10 +$  $=$

 $10 +$  $=$

 $10 +$  $=$

9. Odčítaj na číselnej osi.

$$12 - 2 = \square$$



$$14 - 4 = \square$$



$$17 - 7 = \square$$



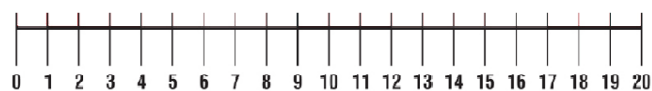
$$15 - 5 = \square$$



$$11 - 1 = \square$$



$$19 - 9 = \square$$



$$13 - 3 = \square$$



$$16 - 6 = \square$$




$$18 - 8 = \square$$





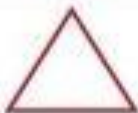




10. Vyfarbi podľa pokynov:

Najväčší kruh vyfarbi zelenou farbou, ostatné červenou, tri obdĺžniky vyfarbi modrou farbou a dva ružovou. Najmenší štvorec vyfarbi žltou farbou a ostatné oranžovou. Všetky trojuholníky vyfarbi hnedou farbou a hviezdy žltou farbou.



11. Spočítaj geometrické útvary a počet zapíš do tabuľky.



| | | | | | |
|---|---|---|---|---|---|
|  |  |  |  |  |  |
| | | | | | |