


Pondelok 6. 4. 2020


Porovnaj.

5		3	14		4	13		11
8		7	9		19	12		15
4		9	16		6	17		10
2		6	15		5	20		18

Doplň rozklady.




Spoj bodky od najmenšieho čísla po najväčšie.



Zapíš počet. Vypočítaj.

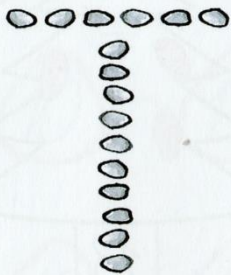


$$10 + 1 = \square$$



$$\square + \square = \square$$

Z koľkých kamienkov sú zložené písmená?



$$\square + \square = \square$$



$$\square + \square = \square$$

Doplň a porovnaj.

$$\square \square \square$$

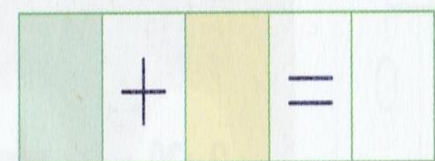
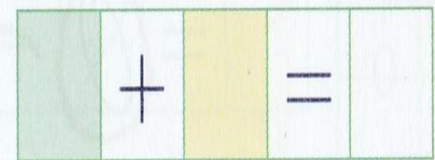
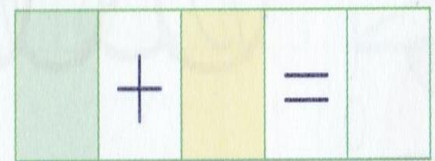

Utorok 7. 4. 2020

Vypočítaj.

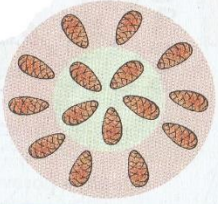
10	+	10	=	
10	+	9	=	
10	+	8	=	
10	+	7	=	
10	+	6	=	
10	+	5	=	
10	+	4	=	
10	+	3	=	
10	+	2	=	
10	+	1	=	



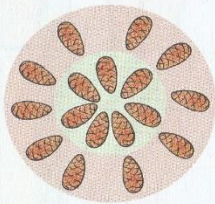
Zapiš počet. Vypočítaj.




Zapiš počet a vypočítaj.




10	+	5	=	
5	+	10	=	



	+		=	
	+		=	



	+		=	
	+		=	



	+		=	
	+		=	

Dokresli šišky, aby bol daný počet. Zapiš rozklad.

13

14

19

12

20

10

Vypočítaj.


3 + 5

4 + 3


6 + 2

Streda 8. 4. 2020

Ktoré čísla
od 0 do 20 chýbajú?
Doplň ich
na vhodné miesto.



Vypočítaj.



$4+1=$

$5+2=$

$6+3=$

$3+3=$

$5+1=$

$3+0=$

Nakresli.
Zapíš počet.

	O 4 VIAC
	<input type="text"/>