

Doplň $>$ $<$ $=$, aby platilo:



VZOR

$3 < 5$

$7 \square 4$

$8 \square 1$

$6 \square 9$

$5 \square 5$

$4 \square 2$

$8 \square 9$

$4 \square 8$

$3 \square 3$

$7 \square 5$

$9 \square 2$

$1 \square 5$

$3 \square 4$

$2 \square 2$

$5 \square 6$

$7 \square 1$

$4 \square 3$

$6 \square 6$

$2 \square 5$

$8 \square 4$


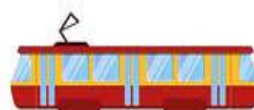


$5 \square 5$

$1 \square 9$

Spočítaj a správne doplň

> < =

VZOR



Vymaľuj podľa vzoru:

1 2 3 4 5 6 7 8 9 10

1 3 8 7 2 6

4 9 10 2 5 4

9 7 6 3 5 1

Spoj počet s číslom




5

7

1

4

2



Správne doplň čísla do číselného radu :



1		3		5		7		9	
---	--	---	--	---	--	---	--	---	--

	2	3		5	6		8		10
--	---	---	--	---	---	--	---	--	----

	2		4		6	7		9	
--	---	--	---	--	---	---	--	---	--

1			4		6			9	
---	--	--	---	--	---	--	--	---	--

1			4	5		7			10
---	--	--	---	---	--	---	--	--	----

	2			5		7		9	
--	---	--	--	---	--	---	--	---	--

		3	4		6		8		10
--	--	---	---	--	---	--	---	--	----

1				5			8		
---	--	--	--	---	--	--	---	--	--

Dokresli správny počet guľičiek



VZOR:

5 

7

3

6

1

9

8

4

10

5

2